

Activity sheet

Football scores level 3

Introduction:

We can use bar charts to present data in a clear way. Can you create some bar charts to show some results from Premier League matches?

Instructions:

- Read the match report for Swansea City v Crystal Palace.



Crystal Palace lost to Swansea City this weekend. Crystal Palace took the lead with a **goal** from Zaha, but Sigurdsson of Swansea City equalised just before half-time. In the second half, Fer scored two **goals** for Swansea and Crystal Palace responded with three **goals** in nine minutes. In the very last minutes of the match, Llorente from Swansea City scored two **goals** to give his team a Premier League win. Overall, Swansea City made 18 **shots** with nine of these **shots on target**, but Crystal Palace only had 12 **shots**, with four of these **on target**. Swansea City made 18 **tackles** to Crystal Palace's 15. Whilst Crystal Palace had two more **clearances** than Swansea, who had made 33.

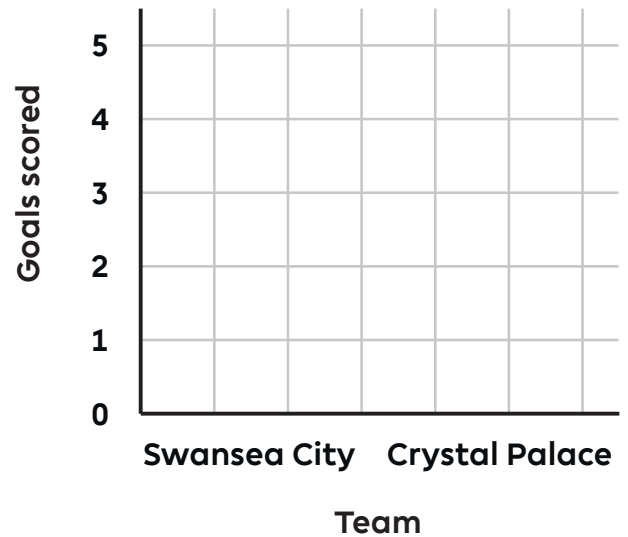
- Use the report to complete the table of match stats:

	Swansea City	Crystal Palace
Goals		
Shots		
Shots on target		
Tackles		
Clearances		

Activity sheet
Football scores level 3


- Use your table to draw a bar chart showing the goals scored in the match. Use the checklist on p3 of this worksheet to make sure you have remembered everything.

1. Bar chart to show goals scored




- Use your table to draw the bar charts showing shots and shots on target from the match. Use the checklist to make sure you have remembered everything.

2. Bar chart to show shots



3. Bar chart to show shots on target




Activity sheet
Football scores level 3

- Use the space in the grid to draw the final two bar charts, one showing tackles and the other showing clearances. Use the checklist below to make sure you have remembered everything.

4. Bar chart to show tackles



5. Bar chart to show clearances



Checklist:

- I have drawn my bars with a ruler.
- I have labelled my axes.
- I have labelled the bars.
- I have written the scale on the vertical axis.
- I have given my chart a title.